

Modified Enlarged 36pt
OXFORD CAMBRIDGE AND RSA EXAMINATIONS

Thursday 6 June 2019 – Morning

A Level Biology A

H420/01 Biological processes

Time allowed: 2 hours 15 minutes
plus your additional time allowance

YOU MUST HAVE:
the Insert

YOU MAY USE:
a scientific or graphical calculator
a ruler (cm/mm)

Please write clearly in black ink.

Centre number

--	--	--	--	--

Candidate number

--	--	--	--

First name(s) _____

Last name _____

READ INSTRUCTIONS OVERLEAF



INSTRUCTIONS

The Insert will be found with this document.

Use black ink. You may use an HB pencil for graphs and diagrams.

Answer ALL the questions.

Where appropriate, your answers should be supported with working. Marks may be given for a correct method even if the answer is incorrect.

Write your answer to each question in the space provided. If additional space is required, use the lined page(s) at the end of this booklet. The question number(s) must be clearly shown.

INFORMATION

The total mark for this paper is 100.

The marks for each question are shown in brackets [].

Quality of extended responses will be assessed in questions marked with an asterisk (*).

BLANK PAGE

SECTION A

You should spend a maximum of 20 minutes plus your additional time allowance on this section.

Write your answer to each question in the box provided.

Answer ALL the questions.

- 1 Rheumatoid arthritis is a long-term condition that causes pain, swelling and stiffness in the joints.**

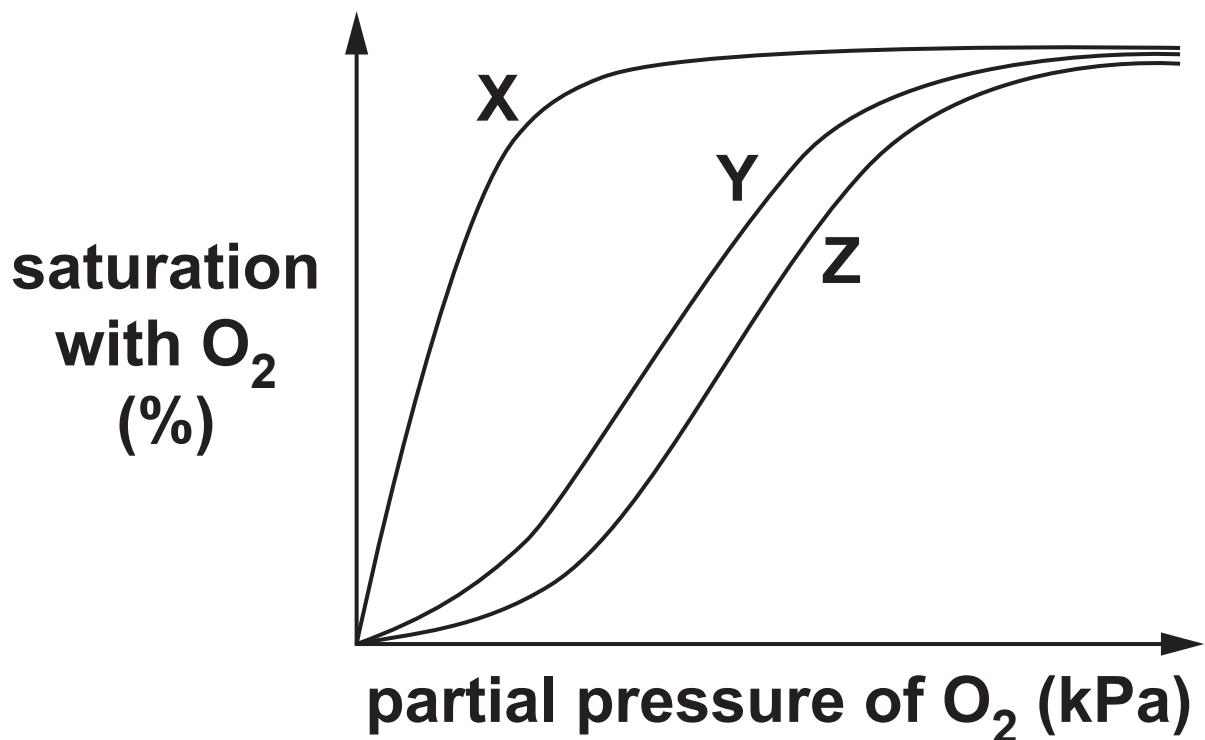
Which of the following, A to D, explains why stem cells are a potential source of treatment for rheumatoid arthritis? [1]

- A Stem cells can be harvested from the umbilical cords of newborn babies.**
- B Stem cells are cheaper than other drug-based therapies.**
- C Stem cells allow regeneration of a variety of tissue types.**
- D Stem cells can be obtained from embryos without any ethical concerns.**

Your answer ☐

- 2 **Myoglobin is a protein found in muscle. Myoglobin has a very high affinity for oxygen at most partial pressures of oxygen.**

**The figure below shows dissociation curves for
adult haemoglobin
fetal haemoglobin
myoglobin.**



Which of the following rows, A to D, shows the correct labels for the lines on the graph? [1]

	X	Y	Z
A	myoglobin	fetal haemoglobin	adult haemoglobin
B	fetal haemoglobin	adult haemoglobin	myoglobin
C	adult haemoglobin	fetal haemoglobin	myoglobin
D	myoglobin	adult haemoglobin	fetal haemoglobin

Your answer

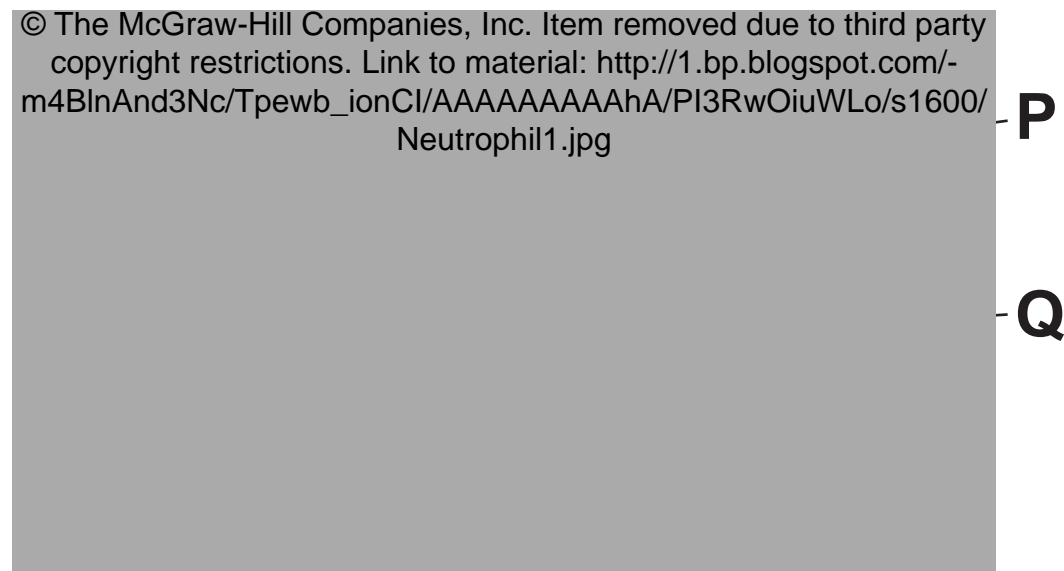
- 3 Which of the following, A to D, is NOT an example of cell signalling? [1]**
- A The hormone insulin being removed from the blood by the glomerulus.**
 - B The neurotransmitter acetylcholine causing depolarisation.**
 - C The hormone prolactin binding to a cell receptor in breast tissue.**
 - D Epithelial cells releasing cytokines in response to histamine.**

Your answer

BLANK PAGE

The image below shows a micrograph of two different types of blood cell.

Questions 4 and 5 refer to this image.



- 4 Which of the following rows, A to D, shows the correct cell names from the image above? [1]

	P	Q
A	neutrophil	erythrocyte
B	erythrocyte	epithelial cell
C	erythrocyte	neutrophil
D	epithelial cell	erythrocyte

Your answer

- 5 Both of the cell types P and Q develop from haematopoietic stem cells in the bone marrow.**

Which of the following statements, A to D, correctly describes haematopoietic stem cells? [1]

- A They are neither pluripotent nor multipotent.**
- B They are pluripotent but not multipotent.**
- C They are both pluripotent and multipotent.**
- D They are multipotent but not pluripotent.**

Your answer

6 Which of the following statements, A to D, correctly explains why meristems can differentiate into xylem vessels in plant stems? [1]

- A Meristems are living and unspecialised.**
- B Meristems are living and specialised.**
- C Xylem vessels are dead and specialised.**
- D Xylem vessels are dead and unspecialised.**

Your answer ☐

BLANK PAGE

7 The following passage outlines the process of phototropism in plants:

Auxin is synthesised in cells at the _____ of the shoot. Auxin causes the cells to _____ on one side, so the stem bends.

Scientists originally thought auxin was _____ by light but this was disproved by the fact that plants growing in the dark and plants growing in unilateral light had _____ auxin levels.

Which option, A to D, is the correct sequence of missing words? [1]

- A meristem, shorten, destroyed, different**
- B tip, elongate, destroyed, similar**
- C meristem, shorten, synthesised, raised**
- D tip, elongate, synthesised, similar**

Your answer

8 A scientist tested a plant suffering from water stress. The plant was found to have high levels of abscisic acid (ABA) in its tissues.

Which of the following statements, A to D, explains this observation? [1]

A ABA causes fruit ripening

B ABA prevents leaf drop

C ABA causes phototropism

D ABA stimulates stomatal closing

Your answer ☐

9 Which of the following statements, A to D, is evidence for geotropism? [1]

A leaves are shed from deciduous plants in the autumn

B roots grow downwards

C shoots grow towards the light

D flowers can change position throughout the day

Your answer

10 Many trees drop their leaves in the autumn.

Which of the following plant hormones is/are thought to be involved in the control of leaf drop? [1]

- 1 auxin**
- 2 ethene**
- 3 gibberellin**

A 1, 2 and 3

B only 1 and 2

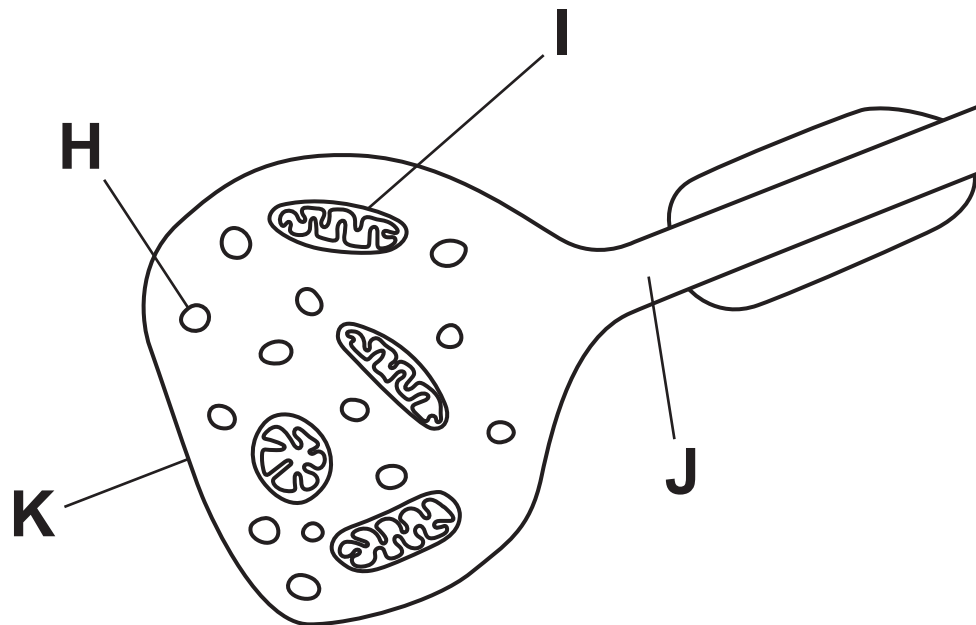
C only 2 and 3

D only 1

Your answer

BLANK PAGE

11 The image below shows a synaptic bulb.



Which of the following rows, A to D, correctly names the parts labelled H to J in the image? [1]

Your answer

	H	I	J	K
A	vesicle containing neurotransmitter	mitochondrion	dendron	postsynaptic membrane
B	vesicle containing Ca^{2+}	mitochondrion	axon	presynaptic membrane
C	vesicle containing Ca^{2+}	myelin	dendron	postsynaptic membrane
D	vesicle containing neurotransmitter	mitochondrion	axon	presynaptic membrane

12 Damage to the hypothalamus results in lower water potential of the blood.

Which of the following, A to D, explains these observations? [1]

- A ADH release increases the water potential of blood.**
- B Mineralocorticoids affect cells in the loop of Henle.**
- C Fewer water channels are inserted into the cell surface membranes of the collecting duct.**
- D The anterior pituitary releases hormones into the blood.**

Your answer

13 Collagen is found in tendons. Tendons attach muscles to bones.

Which of the following lists of properties, A to D, makes collagen suitable for this role? [1]

A strong, inflexible, insoluble

B strong, flexible, soluble

C strong, inflexible, soluble

D strong, flexible, insoluble

Your answer

14 Cyanobacteria are photosynthetic prokaryotes.

A scientist exposed cyanobacteria to light of different colours and intensities and made the following observations:

Most cyanobacteria are blue in colour.

At low light intensities, glucose production in cyanobacteria is low.

When light intensity reaches a certain level the rate of glucose production in cyanobacteria stops increasing.

Which of the following statements, A to D, correctly explains these observations? [1]

- A The pigments in cyanobacteria absorb blue light and light intensity is a limiting factor for the rate of photosynthesis.**
- B The pigments in cyanobacteria absorb red light and light intensity is not a limiting factor for the rate of photosynthesis.**
- C The pigments in cyanobacteria absorb blue light and light intensity is not a limiting factor for the rate of photosynthesis.**
- D The pigments in cyanobacteria absorb red light and light intensity is a limiting factor for the rate of photosynthesis.**

Your answer ☐

15 The hormone aldosterone is produced by the adrenal cortex. Excess production of aldosterone can result in high blood pressure.

The following statements describe processes that occur as a result of aldosterone secretion:

- 1 Na^+/K^+ pumps in the collecting duct of the kidney move three Na^+ ions into the blood and two K^+ ions out of the blood.**
- 2 Cl^- ions enter the blood to maintain electrochemical balance.**
- 3 H^+ ions enter cells lining the kidney tubules.**

Which of the above statements explain(s) why excess aldosterone production can result in high blood pressure? [1]

A 1, 2 and 3

B only 1 and 2

C only 2 and 3

D only 1

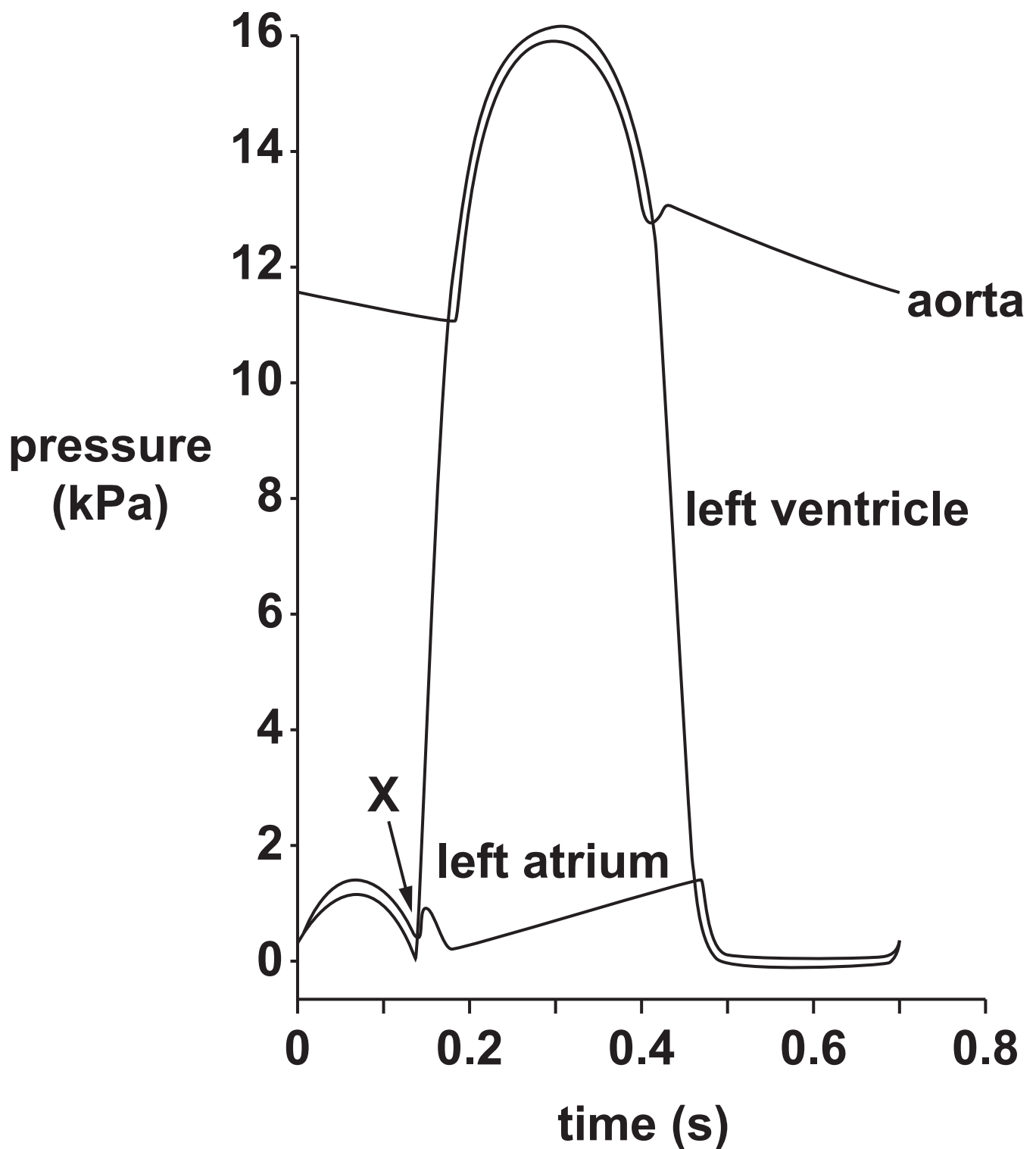
Your answer

SECTION B

Answer ALL the questions.

16 (a) Fig. 16 shows pressure changes during the cardiac cycle.

FIG. 16



[illegible]

(ii) Using Fig. 16, calculate the heart rate of this individual.

Give your answer to 2 significant figures.

heart rate = _____ [1]

(iii) Using Fig. 16, calculate the percentage change between minimum and maximum pressure in the aorta.

Give your answer to 2 significant figures.

percentage change = _____ [2]

(iv) Name the valve which closes at point X on Fig. 16.

_____ **[1]**

(b) The heart supplies oxygenated blood to the tissues.

VO_2^{max} is a measurement of the maximum volume of oxygen that an individual can use during intense exercise in a given time.

Smart watches can estimate the VO_2^{max} of an individual by measuring heart rate while exercising.

Having a higher VO_2^{max} is associated with improved aerobic fitness.

Two male students exercised for 30 min and used smart watches to record their VO_2^{max} .

Table 16 shows their masses and the VO_2^{max} values they recorded.

TABLE 16

Student	Mass (kg)	VO_2^{max} ($\text{cm}^3 \text{kg}^{-1} \text{min}^{-1}$)
1	65	50.4
2	57	48.2

Student 1 drew the following conclusion from this result:

My VO_2^{\max} is higher because my mass is greater. I have more cells than Student 2. Each cell needs oxygen to carry out respiration.

Student 2 said that this conclusion is invalid because several variables have not been controlled.

State THREE variables necessary for a valid comparison that have NOT been controlled in the above experiment.

1 _____

2 _____

3 _____

[3]

(c) Brown fat is a type of tissue.

Brown fat has a higher need for oxygen because fat cells in this tissue carry out aerobic respiration at a higher rate than fat cells in other tissues.

Suggest which organelle is present in higher numbers in brown fat cells than in other fat cells.

_____ **[1]**


BLANK PAGE

17 Gibberellin causes stem elongation in plants.


Fig. 17.1 shows the effect of gibberellin on cabbage plants.

FIG. 17.1

**without
gibberellin**



**with
gibberellin**



Gibberellin causes an increase in the distance between the leaves on the stem, which is known as the internodal length.

(a) Explain why gibberellin is classed as a plant HORMONE.

[3]

(b) A scientist carried out an investigation into the effect of gibberellin on cabbage plants.

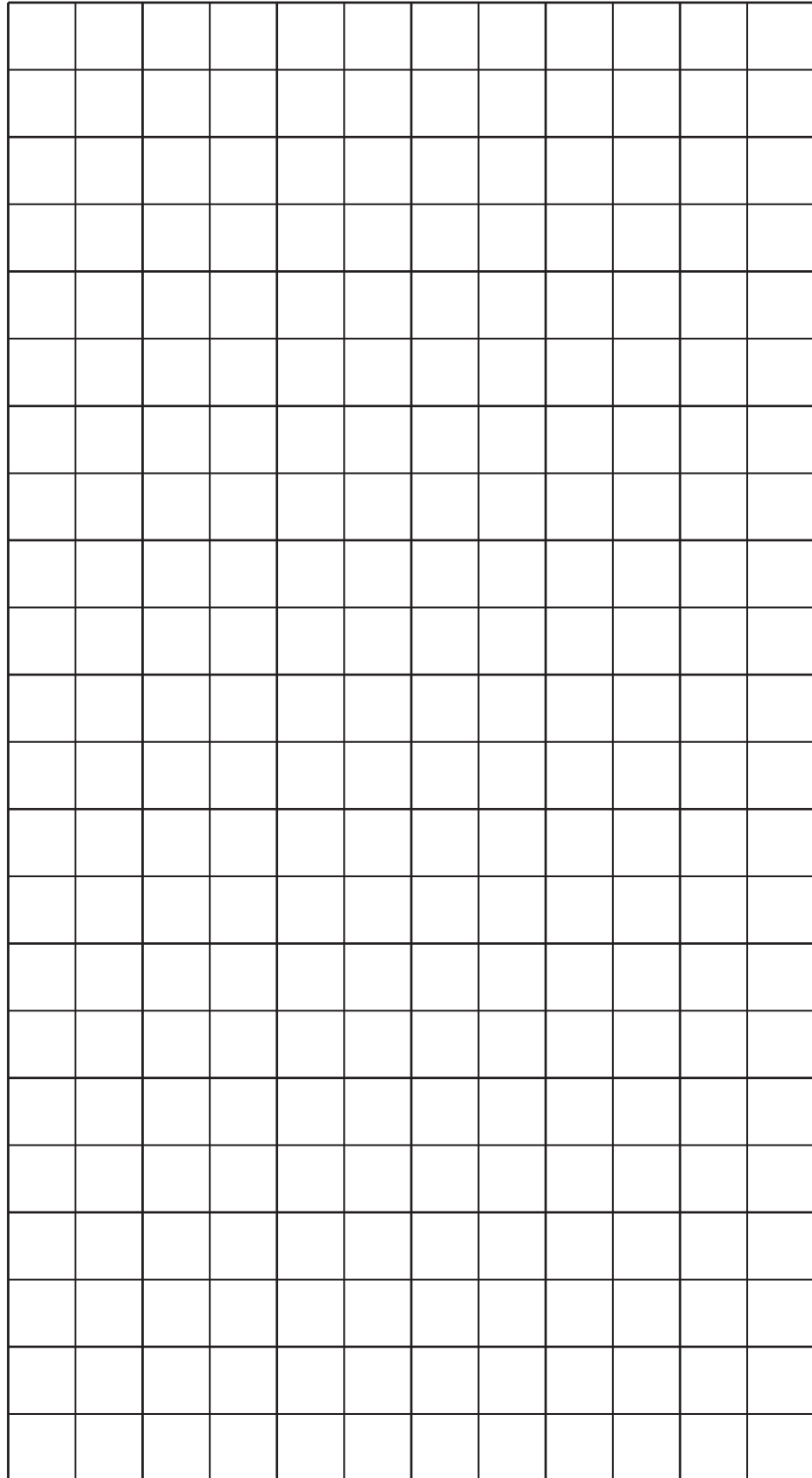
The scientist applied a range of volumes of gibberellin and measured the rate of increase of internodal length over 30 days.

Table 17 shows the scientist's results.

TABLE 17

Volume of gibberellin applied ($\times 10^{-3} \text{ cm}^3 \text{ kg}^{-1} \text{ day}^{-1}$)	Rate of increase of internodal length (mm day^{-1})
0.0	1
0.2	1
0.4	2
0.6	4
0.9	22
1.2	47
1.4	48
1.8	49
1.9	50
2.0	50

(i) Plot the results from Table 17 as a suitable graph. [4]



(ii) Gibberellin causes an increase in internodal length.

State one OTHER role of gibberellin in plants.

[1]

(c) A student carried out chemical tests on cabbage leaves to investigate which molecules were present.

The student's method was as follows:

Add 50cm^3 of distilled water to 2 large cabbage leaves and blend into a smooth liquid using a food mixer.

Place 1cm^3 of the blended cabbage leaf liquid into 5 test tubes:

Tube 1: Add 5 drops of biuret reagent and mix.

Tube 2: Add 2cm^3 of Benedict's solution, mix, then place tube into a water bath for 5min. Remove and cool.

Tube 3: Add 2 drops of iodine solution and mix.

Tube 4: Add 2cm^3 of ethanol and mix. Then add 2cm^3 of distilled water and mix.

Tube 5: Insert a glucose test strip into the liquid then compare the colour to the colour chart provided (see Fig. 17.2 ON THE INSERT).

- (i) Name a TYPE of food molecule that the student will NOT be able to detect using these chemical tests.

_____ [1]

- (ii) The table below is a summary of some of the student's findings.

Complete the table by writing in the missing observations and conclusions. [2]

Tube	Observation	Conclusion
1		Protein present
2	Yellow colour	
3	Pale brown colour	
4		Fat present
5		Glucose concentration small (15mg dm^{-3})

- (iii) The student then used a colorimeter to measure the absorbance of the contents of Tube 2.**

Explain how the use of a colorimeter could improve the student's conclusion.

[1]

18 Mammals and fish both need circulatory systems to transport oxygen to respiring tissues. They have different circulatory systems because they have different oxygen requirements.

(a)* Compare and contrast the circulatory systems of mammals and fish. [6]

Additional answer space if required.

(b) Acetylcholine (ACh) is a neurotransmitter in mammals. Studies have suggested that it also functions as a hormone in some invertebrate species, such as squid.

When ACh comes into contact with specialised cells in squid skin, it causes them to change colour. These colour changes allow the squid to communicate and to camouflage itself.

ACh is made by cells in the centre of the squid's body.

Explain how it is possible for ACh to have an effect on cells in the skin of the squid.

[2]

(c) Squid blood contains a blue oxygen-carrying protein called haemocyanin.

High partial pressures of carbon dioxide reduce the affinity for oxygen of haemocyanin.

Suggest a mechanism by which carbon dioxide could reduce the affinity for oxygen of haemocyanin.

[2]

19 Resistance training with weights can increase muscle mass in the body. It can also lead to vascularisation, where blood vessels become more visible through the skin. Fig. 19.1 shows vascularisation.

FIG. 19.1



Vascularisation occurs in bodybuilders because blood vessels are pushed to the surface by increased muscle mass. They can also become more visible due to reduced body fat and dehydration.

(a) Explain why the visible blood vessels are likely to be veins.

[3]

(b) Some bodybuilders use anabolic steroids to increase their muscle mass.

Suggest why anabolic steroids are effective when applied to the surface of the skin.

[2]

(c) Illegal use of steroids is widespread in professional sport.

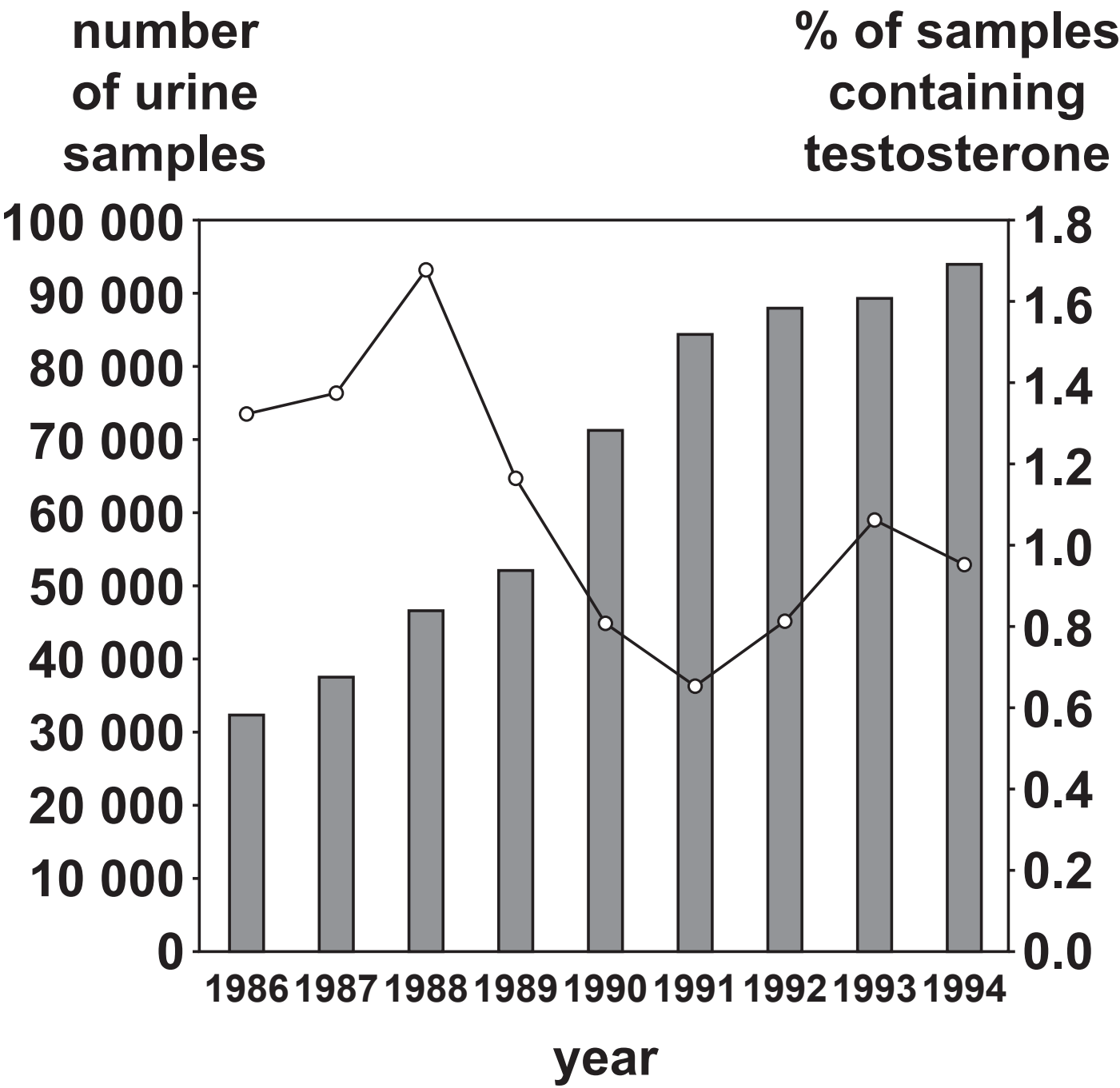
The International Olympic Committee (IOC) tests the urine of athletes to help prevent steroid abuse.

Fig. 19.2 on the next page is a graph showing tests carried out by the IOC between 1986 and 1994.

The bars represent the number of urine samples tested.

The line shows the percentage of samples testing positive for the steroid testosterone.

FIG. 19.2



- (i) Calculate the change in the NUMBER of samples testing positive for testosterone between 1988 and 1991.**

number of samples = _____ [3]

- (ii)* Based on the findings in Fig. 19.2, the head of the IOC stated that:**

“The IOC is succeeding in reducing the level of steroid abuse in professional sport.”

Evaluate this statement using the data in Fig. 19.2. [6]

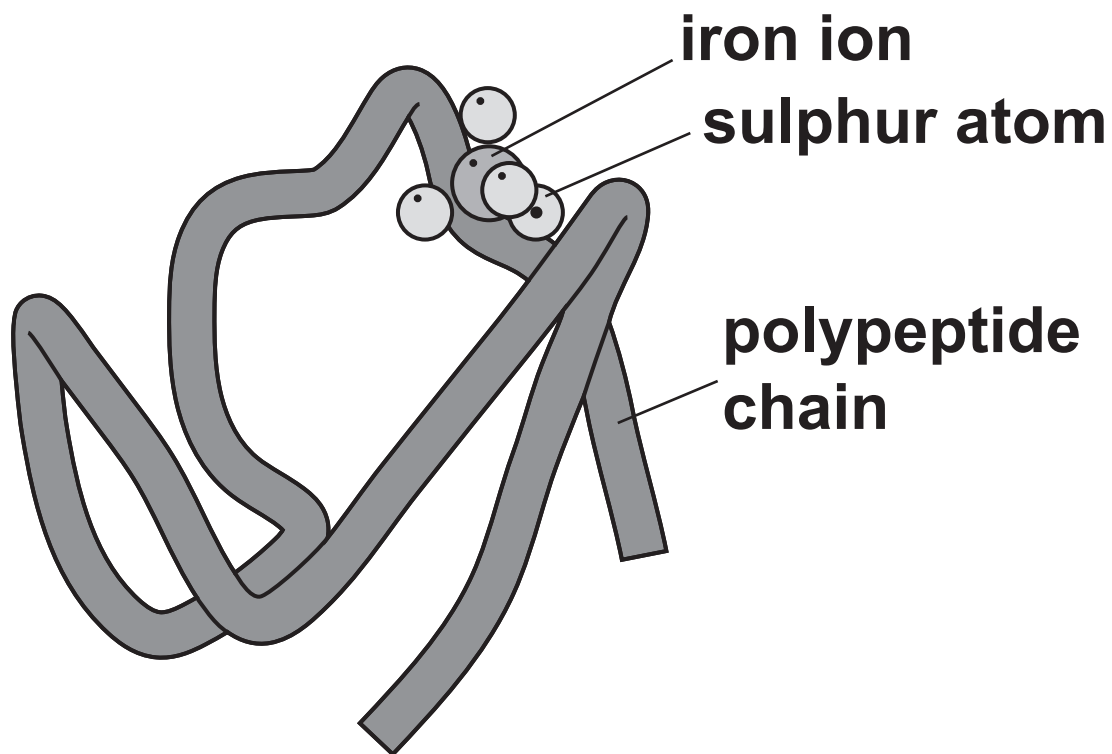
[illegible]

**Additional answer space if
required.**

20 Rubredoxin is a protein found in bacteria. It contains around 50 amino acids. One iron ion is bound by the sulphur atoms of four cysteine amino acids.

The structure of rubredoxin is shown in Fig. 20.1.

FIG. 20.1



- (a) (i) Rubredoxin is known as a **CONJUGATED PROTEIN**.

Use Fig. 20.1 to explain what is meant by the term conjugated protein.

[3]

(ii) Using the information provided about rubredoxin, state TWO similarities between the structures of rubredoxin and haemoglobin.

similarity 1 _____

similarity 2 _____

[2]

- (iii) Rubredoxin and haemoglobin have different secondary and tertiary structures.**

Using the information provided about rubredoxin, state TWO OTHER differences between the structures of rubredoxin and haemoglobin.

difference 1 _____

difference 2 _____

[2]

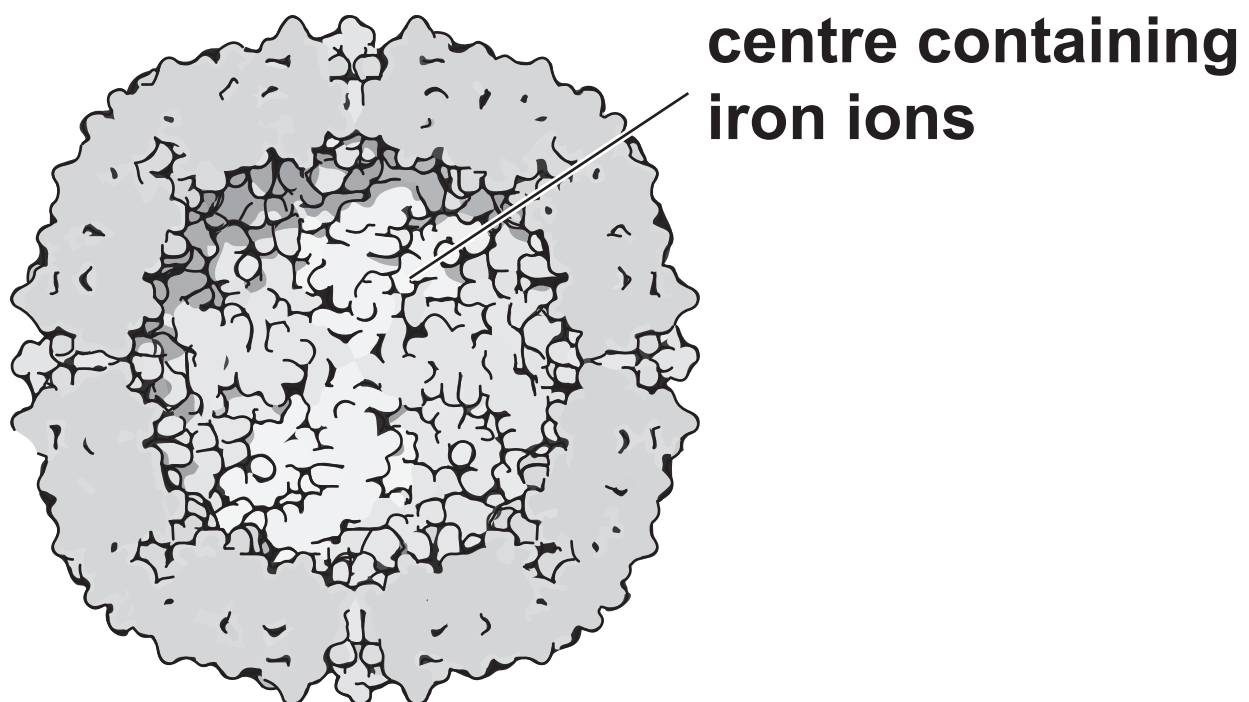
(b) Ferritin is a protein that is used to regulate iron levels within plant tissues.

It is a large spherical structure which can hold many iron (Fe^{3+}) ions at its centre.

Iron can be toxic to plant tissues. Ferritin prevents the build-up of iron.

Fig. 20.2 shows the internal structure of ferritin.

FIG. 20.2



(i) Ferritin molecules can hold 4500 Fe^{3+} ions in the inner sphere.

It is thought that the Fe^{3+} ions are unable to occupy the total available volume of the inner sphere because other molecules are present in the inner sphere.

The volume of the inner sphere of the ferritin molecule is 268 nm^3 .

The volume of an Fe^{3+} ion is $9.04 \times 10^{-4} \text{ nm}^3$.

Calculate the volume of the inner sphere NOT occupied by Fe^{3+} ions.

volume = _____ nm^3 [3]

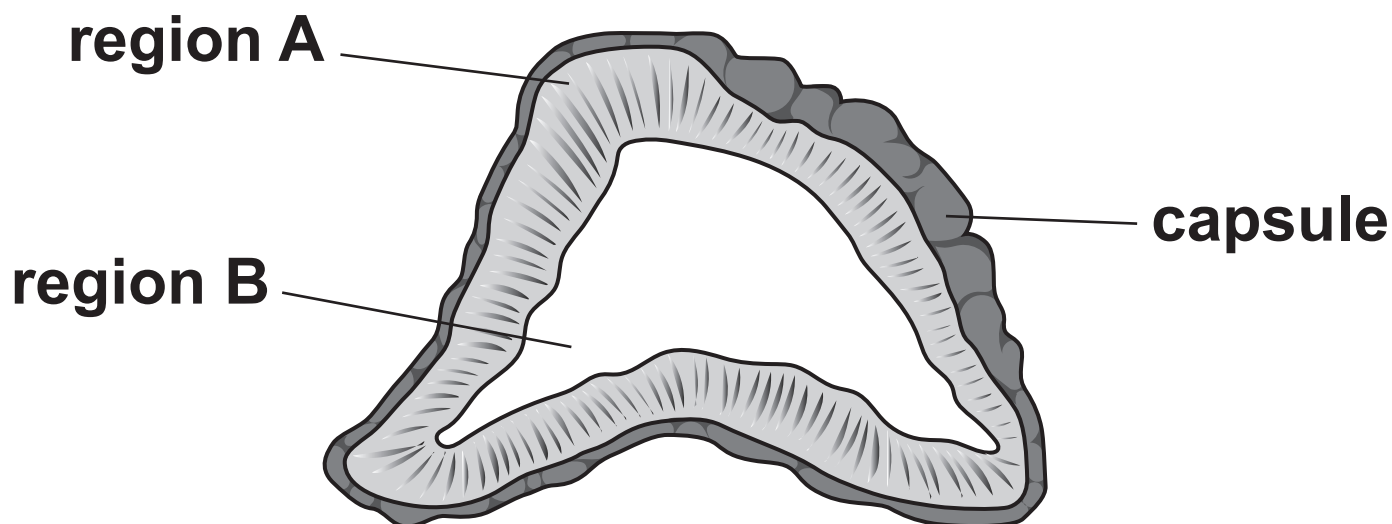
(ii) Explain how hydrophilic and hydrophobic interactions contribute to the spherical shape of ferritin.

[1]

BLANK PAGE

21 Fig. 21.1 shows a transverse section of a human adrenal gland.

FIG. 21.1



(a) (i) The table opposite describes the functions of some hormones produced by different regions of the adrenal gland.

Complete the table using Fig. 21.1 and your own knowledge. [2]

Hormone produced	Functions of hormone
adrenaline	
	increases heart rate increases blood pressure widens pupils
androgens	regulation of sexual characteristics and cell growth
	regulation of metabolism

(ii) Using Fig. 21.1, identify the letter and name of the region of the adrenal gland that secretes adrenaline.

_____ **[1]**

- (b) Phaeochromocytoma is a rare tumour of adrenal gland tissue. It causes increased hormone release from the adrenal glands.**

Fig 21.2 opposite shows three ECG traces showing the heart rhythms of three different patients.

Patient X has a normal heart rhythm.

Patient Y has phaeochromocytoma.

Patient Z has bradycardia.

- (i) Identify patients X, Y and Z by labelling the traces in Fig. 21.2. [2]**

- (ii) Sketch a trace for a patient who has entered atrial fibrillation. [2]**

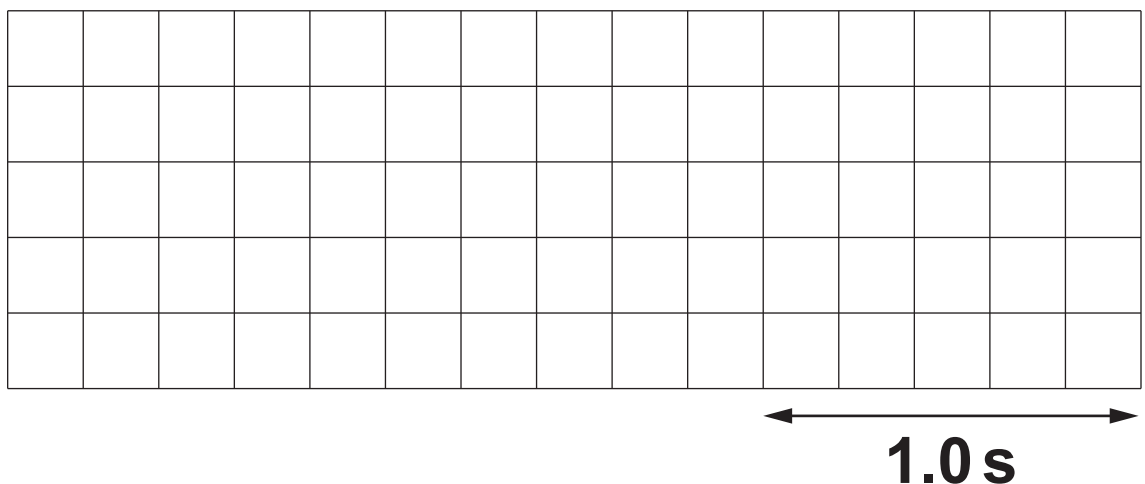
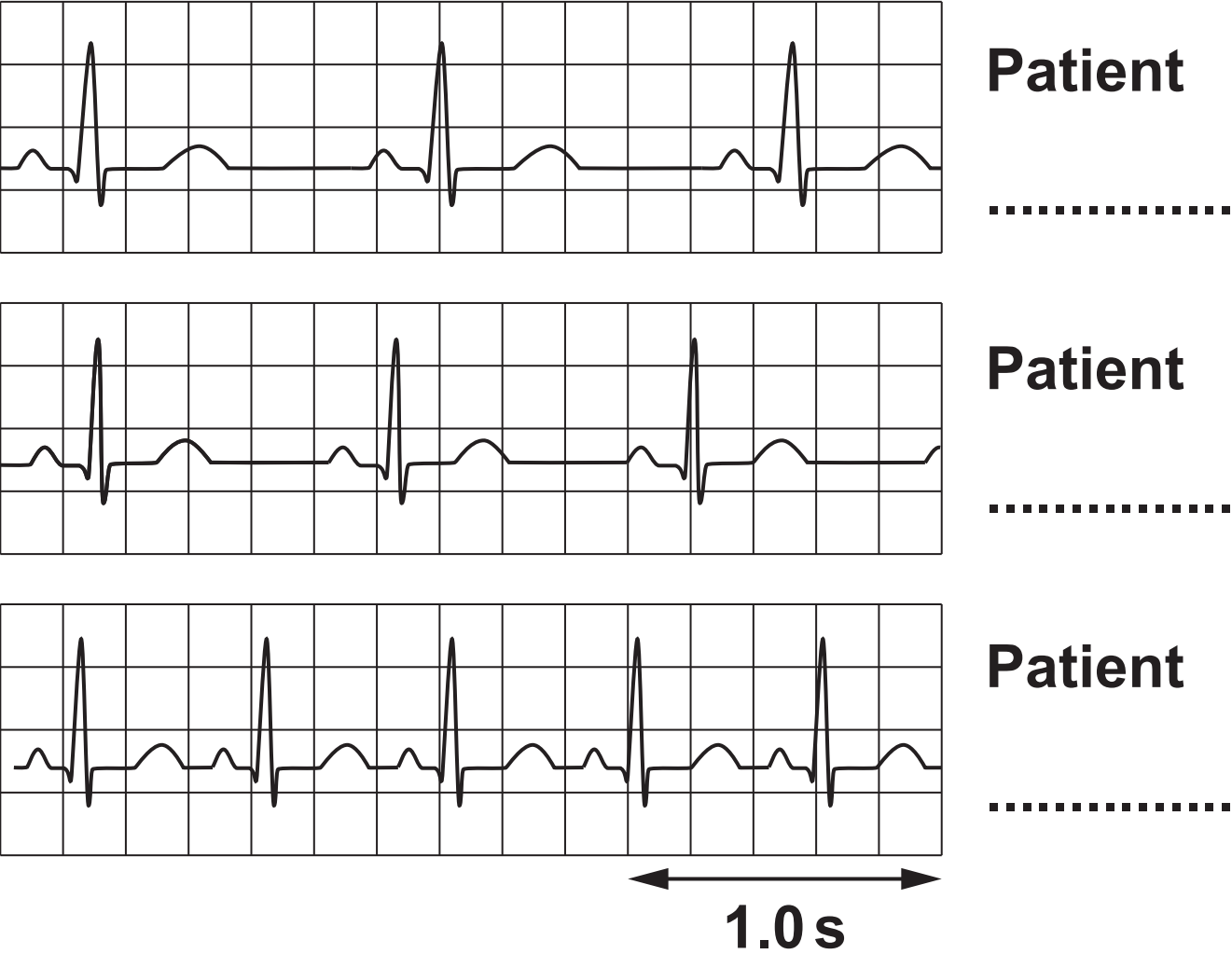


FIG. 21.2



(iii) Suggest why reduced heart rate is sometimes seen in people who are very aerobically fit.

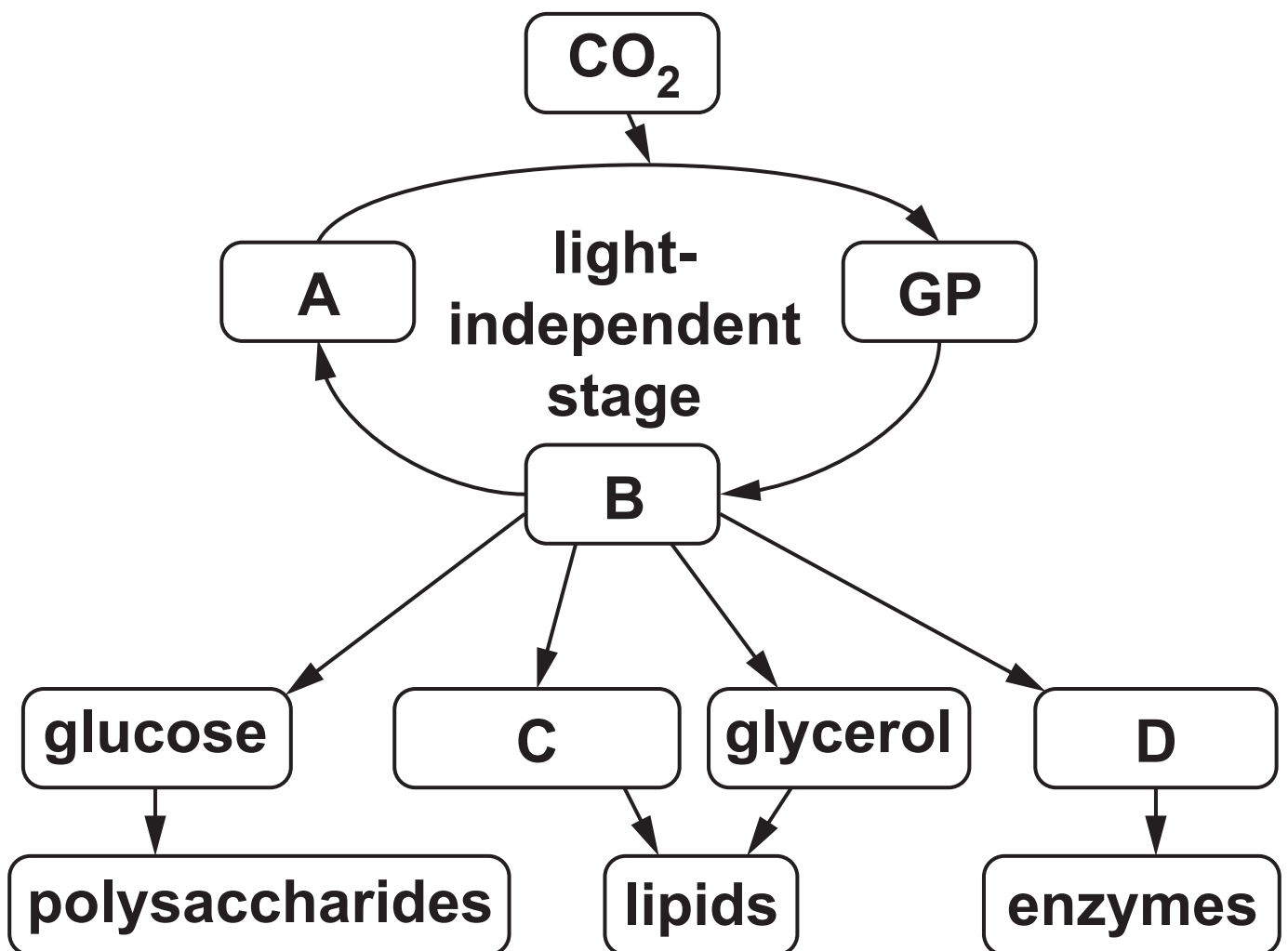
[2]

BLANK PAGE

22 Plants are capable of synthesising a variety of molecules from the products of the light-independent stage of photosynthesis.

Fig 22.1 summarises these processes.

FIG. 22.1



(a) Identify the molecules represented by the letters A, B, C and D in Fig. 22.1 [4]

A _____

B _____

C _____

D _____

- (b) A scientist investigated the rate of photosynthesis in lesser pondweed, *Potamogeton pusillus*.**

The method used is outlined below:

Add 200 cm³ of distilled water to a 300 cm³ glass beaker.

Dissolve 5 g of NaHCO₃ in the water to provide an excess of CO₂.

Place the beaker in a water bath at 10 °C and leave for 10 min to equilibrate.

Insert an oxygen sensor into the water in the beaker and measure the baseline O₂ concentration.

Place 100 g of *P. pusillus* into the beaker.

Remove all other light sources from the room and place an LED light source 20 cm above the top of the beaker.

Use a light intensity meter to ensure the light intensity above the beaker is 5000 lux.

Measure the concentration of oxygen dissolved in the water using a data logger every 10 min for 200 min.

Carry out four more repeats at 10 °C.

Repeat all the above steps in water baths at 15 °C, 20 °C, 25 °C and 30 °C.

(i) Identify the following variables from the scientist's method:

independent variable

dependent variable

ONE control variable

[3]

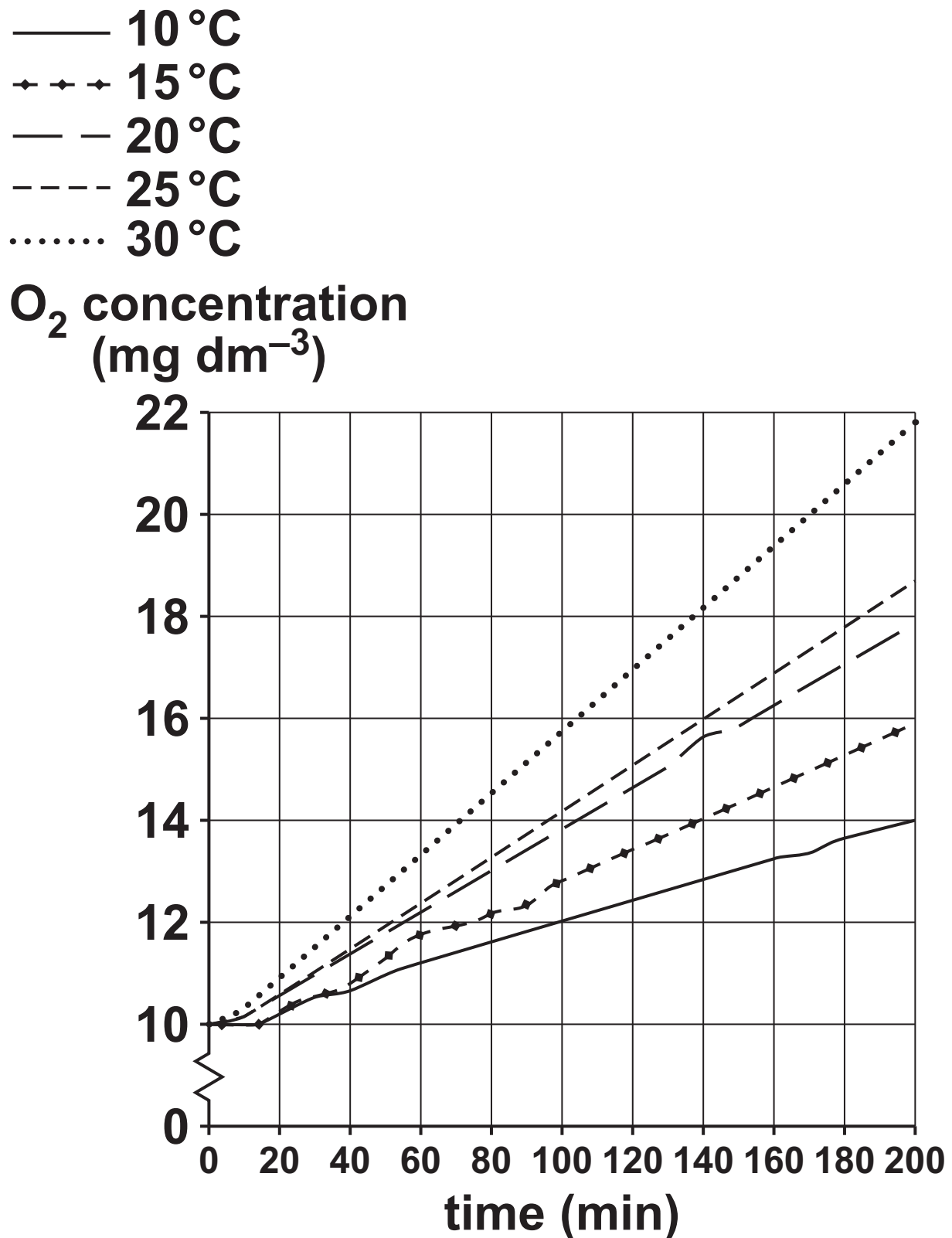
(ii) Identify ONE variable that was NOT controlled in the scientist's method.

_____ **[1]**

BLANK PAGE

(c) Fig. 22.2 is a graph of the scientist's results.

FIG. 22.2



Describe AND explain what these results show about photosynthesis in *P. pusillus*.

[3]

(d) The light-independent stage of photosynthesis used to be referred to as the 'dark reaction'.

(i) Explain why this is both an accurate AND an inaccurate way to describe the light-independent stage.

[2]

(ii) Name the enzyme responsible for fixing CO₂ in the light-independent stage.

[1]

- (e) The scientist then investigated the effect of auxin on *P. pusillus* stems.

The growing tips of stems were removed and the stems were placed in solutions containing different concentrations of auxin.

The scientist analysed the results and determined the following relationship:

The higher the concentration of auxin in the solution, the fewer side shoots grew on the *P. pusillus* stems.

- (i) Explain why this relationship occurs in *P. pusillus* stems.

[1]

(ii) Give TWO examples of the commercial uses of auxin.

1 _____

2 _____

[2]

END OF QUESTION PAPER

ADDITIONAL ANSWER SPACE

If additional space is required, you should use the following lined page(s). The question number(s) must be clearly shown in the margin(s).



Copyright Information

OCR is committed to seeking permission to reproduce all third-party content that it uses in its assessment materials. OCR has attempted to identify and contact all copyright holders whose work is used in this paper. To avoid the issue of disclosure of answer-related information to candidates, all copyright acknowledgements are reproduced in the OCR Copyright Acknowledgements Booklet. This is produced for each series of examinations and is freely available to download from our public website (www.ocr.org.uk) after the live examination series.

If OCR has unwittingly failed to correctly acknowledge or clear any third-party content in this assessment material, OCR will be happy to correct its mistake at the earliest possible opportunity.

For queries or further information please contact The OCR Copyright Team, The Triangle Building, Shaftesbury Road, Cambridge CB2 8EA.

OCR is part of the Cambridge Assessment Group; Cambridge Assessment is the brand name of University of Cambridge Local Examinations Syndicate (UCLES), which is itself a department of the University of Cambridge.